


Name _____ Period _____

College Prep Chemistry of the Earth System

Assignment 1H – Length and Operation Practice

30 Points


Measure each of the boxes below giving measurements to 0.01cm, the resolution of the ruler.

A. 


Measured Length A: _____ cm

B. 


Measured Length B: _____ cm

C. 


Measured Length C: _____ cm

D. 

Measured Length D: _____ cm

E. 

Measured Length E: _____ cm

F. 

Measured Length F: _____ cm

Perform the following calculations based on the measurements above. Round all answers to the correct number of digits based on the rounding rules for adding and subtracting.

Measure A + Measure B	Measure C – Measure D	Measure D + Measure F + Measure E